

# MAT385 Final, Spring 2017

Name:

## Directions:

- Each problem is worth 10 points. **You must skip one of the “old” problems (1-7), and one of the new problems, 8-15.** Write “SKIP” clearly on each problem you skip.
- Show your work! Answers without justification will likely result in few points. Your written work also allows me the option of giving you partial credit in the event of an incorrect final answer (but good reasoning).
- Indicate clearly your answer to each problem (e.g., put a box around it).
- **Good luck, and have a wonderful summer.**

## Problem 1. Propositional Logic

- a. (6 pts) Using propositional logic, prove the following argument:

If school costs rise, the student population will fall. Either costs will rise, or the government will subsidize the schools. The school population does not decline. Therefore the government subsidized the schools.

Use the statement letters C (costs rise), P (population falls), G (government subsidizes).

- b. (4 pts) Prove that

$$P \wedge P' \rightarrow Q$$

showing that from a contradiction anything follows. **Prove:** do not simply **assert!**

**Problem 2.** Using predicate logic,

- a. (5 pts) write the following as a theorem, and then
- b. (5 pts) prove it:

Every member of the board comes from industry or government. Everyone from government who has a law degree is in favor of the motion. John is not from industry, but he does have a law degree. Therefore, if John is a member of the board, he is in favor of the motion.

Use letters  $M(x)$ ,  $I(x)$ ,  $G(x)$ ,  $L(x)$ ,  $F(x)$ ,  $j$  – member, industry, government, law, favor, john.

**Problem 3.** Prove that the proposition

$$1 \cdot 2^1 + 2 \cdot 2^2 + 3 \cdot 2^3 + \cdots + n \cdot 2^n = (n - 1)2^{n+1} + 2$$

is true for every natural number  $n$ .



**Problem 5.** Given the infix expression  $(a + b) * c - ((d - 3) + e/7)/(f + g)$ .

a. (6 pts) Draw the corresponding expression tree. What is its depth?

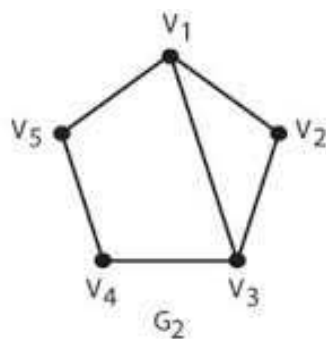
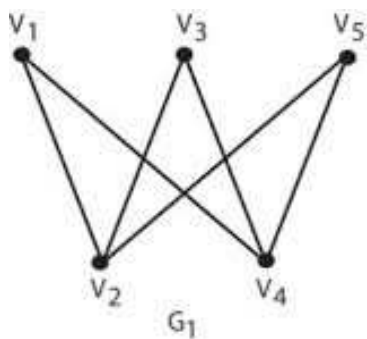
b. (4 pts) Give the equivalent postfix and prefix expressions, explaining how each works:

- postfix

- prefix

**Problem 6.** Isomorphisms and bijections (one-to-one and onto mappings).

- a. (4 pts) The two graphs shown are not isomorphic: identify a characteristic of the graphs which demonstrates that they are not isomorphic.



- b. (4 pts) If you add enough edges to each, you'll get two complete simple graphs, which are isomorphic. What is the **minimal number** of edges you must add to create isomorphic graphs? Justify!

- c. (2 pts) If there is a bijection between the set of natural numbers and the set of prime numbers, what does this prove?

**Problem 7.** Suppose that performing an operation on a list of size  $n$  (assume  $n = 2^m$  for  $m$  a natural number) requires three times the number of comparisons of performing the operation on a list of half that size, plus one comparison.

Suppose 1 comparison is required for a list of 1 element, i.e.  $C(1) = 1$ .

- a. (2 pts) Write the first five terms of  $C$ , for lists of size 1, 2, 4, 8, and 16.

$n$	$C(n)$
1	
2	
4	
8	
16	

- b. (4 pts) write the recurrence relation for  $C(n)$  as a function of  $C(n/2)$ .

- c. (4 pts) Use any method (formula or induction) to give a closed form solution for  $C(n)$ .

**Problem 8:**

a. (4 pts) Draw all 11 non-isomorphic simple graphs of four (unlabeled) vertices in an organized fashion. Label them (from A to K) by number of edges (smallest to largest).

b. (3 pts) How many and which ones are connected and admit Euler paths? Define Euler paths.

c. (3 pts) How many and which ones admit Hamiltonian circuits? Define Hamiltonian circuits.



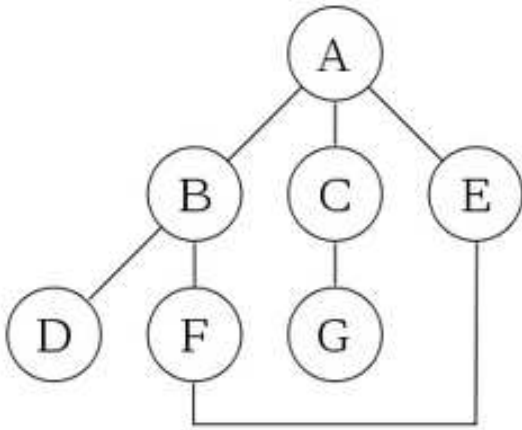
**Problem 9:**

- a. (7 pts) Here is the Adjacency matrix for a graph  $G$ . Use Dijkstra's algorithm to compute the shortest distance from node a to node f:

	a	b	c	d	e	f
a	0	3	8	4	$\infty$	10
b	3	0	$\infty$	6	$\infty$	$\infty$
c	8	$\infty$	0	$\infty$	7	$\infty$
d	4	6	$\infty$	0	1	3
e	$\infty$	$\infty$	7	1	0	1
f	10	$\infty$	$\infty$	3	1	0

- b. (3 pts) Find and draw a minimal spanning tree for  $G$ .

**Problem 10:** For the graph given in the following figure,



a. Illustrate a depth-first traversal of the graph starting from node f (note: the word “**Illustrate**” means more than writing down the solution).

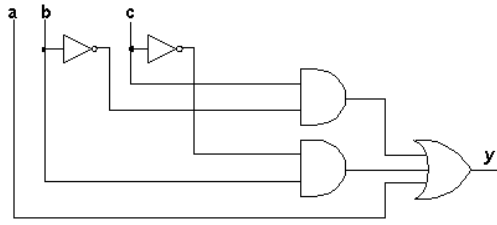
b. Illustrate a breadth-first traversal of the graph starting from node f.

**Problem 11:** Prove the following two properties of a Boolean Algebra:

a.  $(x + y) \cdot (x + 1) = x + (x \cdot y) + y$

b.  $(x \cdot y) + (x \cdot 0) = x \cdot (x + y) \cdot y$

**Problem 12:** For the logic network in the following figure



a. construct a Boolean expression (a sum of products), and

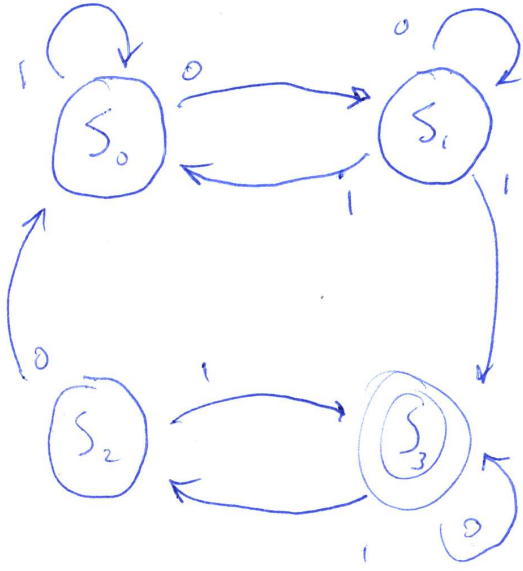
b. construct the truth table.

c. Then use a Karnaugh map to show that the expression is minimized.

**Problem 13:** Use Quine-McCluskey to find a minimal sum of products form for the Boolean expression

$$x_1x_2x_3x_4 + x_1x_2'x_3x_4 + x_1x_2'x_3x_4' + x_1'x_2x_3x_4 + x_1x_2x_3'x_4 + x_1'x_2x_3'x_4$$

**Problem 14:** For the FSM given by the following State graph,



a. create the State Table.

b. write a regular expression that captures all recognized strings.

