

Section 9.3: Finite-State Machines

April 28, 2022

Abstract

We model a machine as a set of states, inputs which lead to a change in state, a clock to synchronize the machine world, and outputs, which result from a particular state. We use tables and graphs to describe how the inputs relate to changes in state and the outputs of each state, then practice creating simple finite-state machines.

Finite-state machines can be used to recognize input, and we will look at the kinds of input that can be recognized, as well as construct the machines that recognize given input. Furthermore, some machines are overly complicated, in that we can simplify them and get the same functionality. We will examine some ways in which we can “minimize” (streamline) a finite-state machine.

1 Finite-State Machines

Definition: A finite-state machine M is a structure $[S, I, O, f_s, f_o]$ where

Table 1: Elements of a finite-state machine.

S	finite set of states of the machine
I	input alphabet (finite set of symbols)
O	output alphabet (finite set of symbols)
f_s	$f_s : S \times I \rightarrow S$, the next-state function
f_o	$f_o : S \rightarrow O$, the output function

The machine is initialized to start in state s_0 , and the machine operates *deterministically* (meaning that there is no randomness associated with its operation, given a fixed sequence of inputs).

We assume discrete times, synchronized by a clock, so that

$$f_s(\text{state}(t_i), \text{input}(t_i)) = \text{state}(t_{i+1})$$

and that

$$f_o(\text{state}(t_i)) = \text{output}(t_i)$$

We represent f_s and f_o by state tables (e.g. Example 29: Table 9.1, p. 730), and state graphs (e.g. Figure 9.3, p. 730):

Present state	next state, given input		Output
	0	1	
s_0	s_1	s_0	0
s_1	s_2	s_1	1
s_2	s_2	s_0	1

Time	t_0	t_1	t_2	t_3	t_4	t_5
Input	1	1	0	0	1	-
State	s_0					
Output	0					

Figure 9.3

A summary of these elements for Example 29:

Table 2: Elements of finite-state machine of Example 29, p. 730.

S	$\{s_0, s_1, s_2\}$
I	$\{0,1\}$
O	$\{0,1\}$
f_s	$f_s(s_0, 0) = s_1, f_s(s_0, 1) = s_0$ $f_s(s_1, 0) = s_2, f_s(s_1, 1) = s_1$ $f_s(s_2, 0) = s_2, f_s(s_2, 1) = s_0$
f_o	$f_o(s_0) = 0, f_o(s_1) = 1, f_o(s_2) = 1$

Example: Practice 43, p. 731 . For the machine M of Example 29, what output sequence is produced by the input sequence 11001? (Note: the state table corresponding to the state graph is in figure 9.3 - we could use either the table or the graph to generate the output sequence.)

Example: Practice 44 and 45, p. 731

PRACTICE 44 A machine M is given by the state graph of Figure 9.4. Give the state table for M .

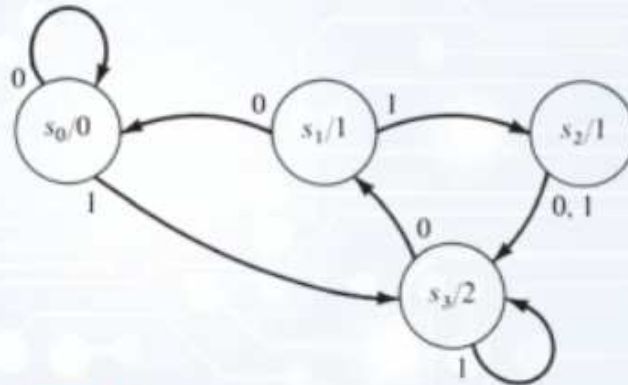


Figure 9.4

PRACTICE 45 A machine M is described by the state table shown in Table 9.2.

- Draw the state graph for M .
- What output corresponds to an input sequence of 2110?

Present state	Next state			Output
	Present input 0	1	2	
s_0	s_0	s_1	s_1	0
s_1	s_1	s_0	s_0	1

Example: Exercise 4, p. 751 : Write the state table for the ma-

chine, and compute the output sequence for the given input sequence:

	<p>4. 1101100</p> <pre> graph LR s0((s0/1)) -- 1 --> s0 s0 -- 0 --> s3((s3/0)) s1((s1/0)) -- 1 --> s0 s1 -- 0 --> s2((s2/1)) s2 -- 1 --> s1 s2 -- 0 --> s2 s3 -- 0 --> s1 s3 -- 1 --> s2 </pre>																						
<table border="1" style="width: 100%; border-collapse: collapse;"> <thead> <tr> <th rowspan="2">Present state</th> <th colspan="2">next state, given input</th> <th rowspan="2">Output</th> </tr> <tr> <th>0</th> <th>1</th> </tr> </thead> <tbody> <tr> <td>s_0</td> <td></td> <td></td> <td>1</td> </tr> <tr> <td>s_1</td> <td></td> <td></td> <td>0</td> </tr> <tr> <td>s_2</td> <td></td> <td></td> <td>1</td> </tr> <tr> <td>s_3</td> <td></td> <td></td> <td>0</td> </tr> </tbody> </table>	Present state	next state, given input		Output	0	1	s_0			1	s_1			0	s_2			1	s_3			0	
Present state		next state, given input			Output																		
	0	1																					
s_0			1																				
s_1			0																				
s_2			1																				
s_3			0																				

2 Construction of a machine: the Binary Adder

In section 8.2 we saw how one might create a logic network in hardware for the addition of binary numbers. We now consider how this can be incorporated into a finite-state machine which is analogous (pp. 731-732).

We must specify the five elements of a finite-state machine: $[S, I, O, f_s, f_o]$. What is the set of states, what the set of inputs, what the set of outputs, and how are the functions f_s and f_o defined?

If you recall the full binary adder, which added three binary digits, there are four possible outcomes:

- 00: carry 0, write 0
- 01: carry 0, write 1
- 10: carry 1, write 0
- 11: carry 1, write 1

Now we just have to figure out

- What the output should be, and
- What the “next state” function looks like.

Example: Practice 47, p. 733 : Compute the sum of 01110110 and

01010101 by using the binary adder machine of Figure 9.5.

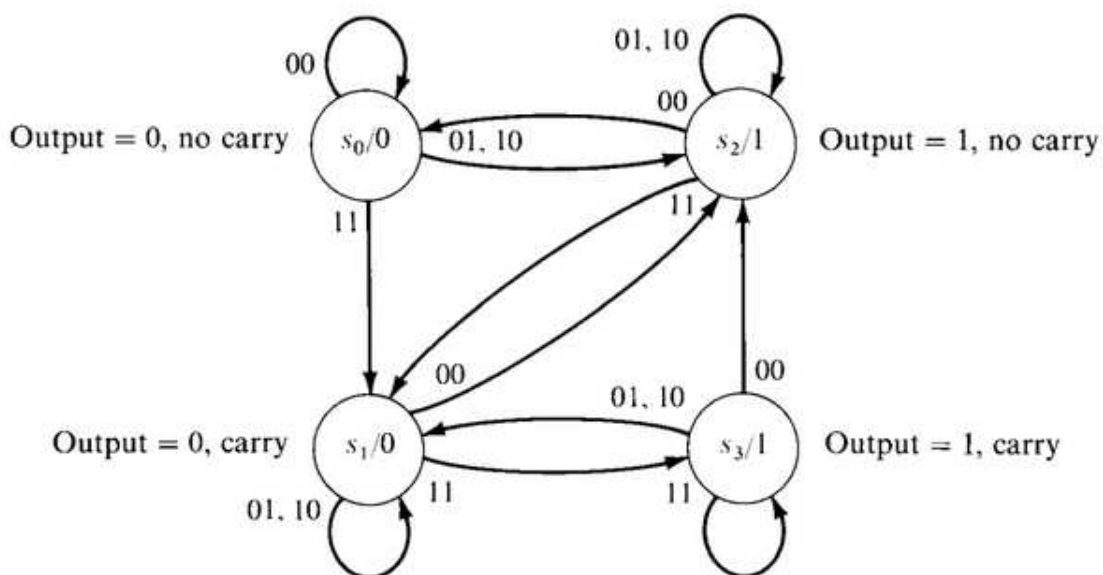


Figure 9.5

Now let's try something a little different:

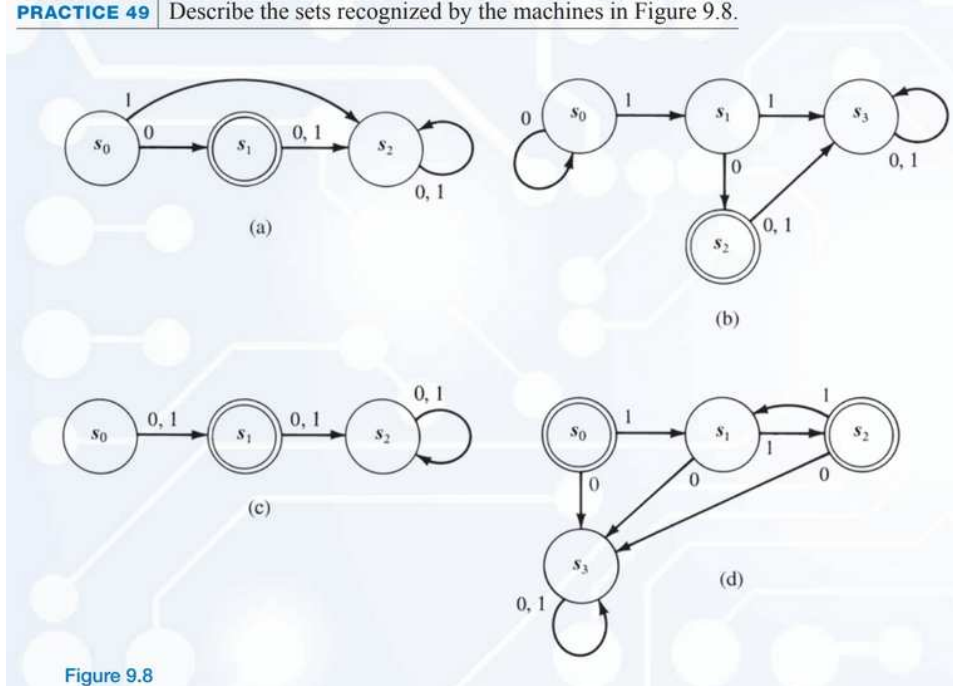
Example: Exercise 15(a), p. 752 This is a modification, in some sense, of the binary adder. First of all, recognize that only one bit is being stored: the author intends in this problem that the first bit in the output sequence is the output of state s_0 , in which the machine started. We need to "carry" the bit which we will write next time, and write the current bit. We'll solve this in two ways: in a sloppy way first, and then in a better way - illustrating the need to be able to minimize a finite-state machine.

3 Recognition

Definition: Finite-State Machine Recognition A finite-state machine M with input alphabet I recognizes a subset S of I^* (the set of finite-length strings over the input alphabet I) if M , beginning in state s_0 and processing an input string α , **ends** in a final state (a state with output 1) if and only if $\alpha \in S$.

Example: Practice 49, p. 735

PRACTICE 49 Describe the sets recognized by the machines in Figure 9.8.



Notes:

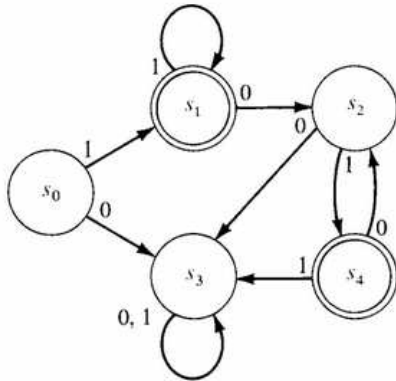
- Note the emphasis on the word “ends”: we assume that the input stops, and when the input stops the final output is a 1.
- Note also the “if and only if”: this indicates that, if the output ends in a 1, then the string α is in S ; and if string α is in S , then the output ends in a 1.

What kinds of input can a finite-state machine recognize? **Regular expressions.** Regular expressions over I are defined recursively by

- the symbol \emptyset and the symbol λ ;
- the symbol i for any $i \in I$; and
- the expressions (AB) , $(A \vee B)$, and $(A)^*$ if A and B are regular expressions.

Example: Exercise #36, p. 755 : give a regular expression for the set recognized by the finite-state machine.

36.



Kleene's Theorem assures us that a finite-state machine can recognize a set S of input strings if and only if the set S is a regular set (that is, a set represented by a regular expression).

Since some very reasonable sets are not regular (e.g. $S = \{0^n 1^n\}$, where a^n stands for n copies of a), finite-state machines are obviously not sufficient to understand all of computation.

Examples of regular sets given by regular expressions:

- #27b. The set of all strings beginning with 000:
- #28a. The set of all strings consisting entirely of any number (including none) of 01 pairs or consisting entirely of two 1s followed by any number (including none) of 0s:
- #28b. The set of all strings ending in 110:
- #28c. The set of all strings containing 00:
- #43b. The set of all strings of 0s and 1s having an odd number of 0s:

Example: Exercise 26(b), p. 754 - recognition and minimization motivation. Construct a finite-state machine that acts as recognizers for the input described by producing an output of 1 exactly when the input received to that point matches the description. The input and output alphabet in each case is 0,1.

The set of all strings where the number of 0s is a multiple of 3.

Example: Exercise 25(b), p. 754 : Construct a finite-state machine to recognize all strings consisting of two or more 1s followed by a single 0.

4 Machine Minimization

4.1 Unreachable States

One obvious way in which a machine can be minimized is if there is an **unreachable state**: if so, then that state can certainly be trimmed from the machine without any consequences (from the standpoint of output). For example: Table 9.3, p. 738; and Figure 9.9, p. 738.

Example: Practice 52, p. 738

PRACTICE 52 What state(s) is/are unreachable from s_0 in the machine of Table 9.4? Try to get your answer directly from the state table.

Present state	Next state		Output
	Present input 0	1	
s_0	s_1	s_4	0
s_1	s_4	s_1	1
s_2	s_2	s_2	1
s_3	s_3	s_1	0
s_4	s_0	s_0	1

4.2 Equivalent States

It would be nice if we had some general way of minimizing a machine, however. It turns out that we can find a minimized machine by using the idea of equivalent states. The idea is that several redundant states might operate in such confusing fashion that it appears there's lots going on, when there's not!

In the first step, the unreachable states are removed. That's the easy part. Then we define

Equivalent States: two states s_i and s_j of M are **equivalent** if, for any $\alpha \in I^*$, $f_o(s_i, \alpha) = f_o(s_j, \alpha)$ where by the **awful notation** $f_o(s, \alpha)$

we mean the **sequence** of output which occurs given that we start in state s and receive input α .

(Our author seeds confusion by re-using notation: we are redefining f_o as a function from $S \times I^* \rightarrow O^*$, where O^* is finite strings of output.)

In order to find equivalent states, we define the notion of **k-equivalency**: two states are k-equivalent if the machine matches output on an input of k symbols to the two states.

- a. States having the same output symbol are 0-equivalent.
- b. For 1-equivalency, we check two 0-equivalent states to see that the next-states under all input symbols (of length 1) are 0-equivalent.
- c. For 2-equivalency, we check 1-equivalent states to see that the next-states under all input symbols (of length 1) are 1-equivalent - and hence equivalent for strings of length 2, total.
- d. Etc.!

We iteratively step through equivalencies (from 0 on up): as soon as the states do not change, from k-equivalency to (k+1)-equivalency, then we have minimized our machine.

Best to look at a few examples!

Example: The sloppy delay machine of Exercise 15a:

<i>state</i>	0	1	<i>out</i>
s_0	s_1	s_2	0
s_1	s_3	s_4	0
s_2	s_5	s_6	0
s_3	s_3	s_4	0
s_4	s_5	s_6	0
s_5	s_3	s_4	1
s_6	s_5	s_6	1

The set of states is divided up into subsets of the initial set which have for their union the entire set S , and no common intersections. This is called a **partition** of the set S . As we progress from 0-equivalency on up, each subset can be divided, but none ever coalesce. There can be **partition refinement** (finer partition) only.

Example: Exercise #65, p. 758

<i>state</i>	0	1	<i>out</i>
s_0	s_3	s_6	1
s_1	s_4	s_2	0
s_2	s_4	s_1	0
s_3	s_2	s_0	1
s_4	s_5	s_0	1
s_5	s_3	s_5	0
s_6	s_4	s_2	1

Example: Exercise #67, p. 758

<i>state</i>	0	1	<i>out</i>
s_0	s_1	s_2	0
s_1	s_2	s_3	1
s_2	s_3	s_4	0
s_3	s_2	s_1	1
s_4	s_5	s_4	1
s_5	s_6	s_7	0
s_6	s_5	s_6	1
s_7	s_8	s_1	0
s_8	s_7	s_3	0