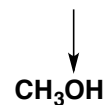
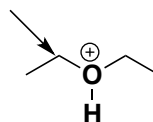
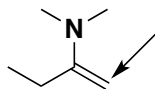
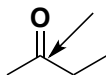


CHE 310 – 002 & 003  
Lecture Homework #24

**Section 002 Due:** Wednesday, March 27, 2019, 9:00 am.

**Section 003 Due:** Wednesday, March 27, 2019, 10:00 am.

1. Identify each indicated atom below as to whether it would be electrophilic or nucleophilic.



2. What are the common names for the substituents below?

⋈ = location where substituent is attached to main chain

