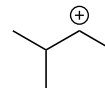
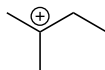
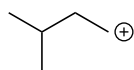


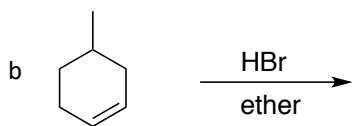
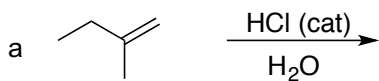
CHE 310 – 002 & 003
Lecture Homework #26

Due Monday, April 1, 2019 (no joke)

1. Rank the carbocations below from most stable (1) to least stable (3)



2. Provide the major product(s) for the reactions below.



3. Provide the complete electron pushing mechanism for the reaction below.

